



Directions:





Complete 24 of the activities shown below, turn in your completed form to your school in August, and receive a prize!







Cross off each activity as you complete it. The Level Up Your Learning website can be found in the icons toward the bottom of the district home webpage: www.olatheschools.org.

FIFTH GRADE

Student Name _____

School _____

<p>Reading: Using this word list below, write an antonym (word that means the opposite) for each word:</p> <p><i>disrespectful</i> <i>freezing</i> <i>crunchy</i> <i>disgusting</i> <i>difficult</i></p>	<p>Math: Visit a local park. Look for all the spheres you can find. Remember a sphere is a 3-D ball or globe. Once you find the number of spheres, multiply that by 10 and divide by 2. What is your answer?</p>	<p>Math: Nick and Angela left for the fireworks show 30 minutes before it started. The show lasted 1 ½ hours, ending at 11:00 pm. What time did Nick and Angela leave for the show?</p> 	<p>Music: Using things around the house, design and make an instrument you can play. After making it, try to play it and have someone guess what instrument it is.</p>	<p>Writing: Imagine that you are planning a summer picnic for you and your best friends. Your picnic will need to have a theme, and your meal will need to go with that theme. Write a description of your theme, the food, and your decorations for your picnic.</p>
<p>Spelling/Phonics: Using paper and pencil, create your own word ladder of 8 words with clues, using the sound “th”. The first word is THROW.</p> 	<p>Writing/Music: Choose your favorite topic and write a song about it. Sing the song to a friend or family member and see if they can guess the topic you wrote about.</p>	<p>Math: A local Middle School Band is performing at a 4th of July parade. The band rents vans for the trip, which cost \$125 each. If there are 64 kids in the band and each van can hold 11 students how much will the band spend on transportation?</p>	<p>Reading: Read a chapter (or 5 pages) of your favorite book. Tell your family or friends what you read about and make a prediction of what will happen next.</p> 	<p>Writing: How late do you think you should be able to stay up during the summer months? Write a persuasive paragraph to your parents to try to convince them to change your bedtime.</p>
<p>Math: If Johnny went to the store with \$10.50 and he bought a candy bar for \$1.50, a toy for \$2.25, and a piece of gum for 45 cents, how much money does he have left?</p>	<p>Reading: Select a topic. Write a rhyming poem that has at least 5 lines. The last line in each sentence must rhyme. Share your poem with a friend or family member.</p> 	<p>Math: The city Parks Department is expecting a big crowd for fireworks this year, and they want to put a fence around the seating area to keep everyone safe. If the seating area is a square with 250-yard sides, how many <u>feet</u> of fencing will they need?</p>	<p>Music: Using your favorite song, create a stomp routine with some friends. Practice rhythm and staying on beat. Perform for family and friends.</p>	<p>Writing: Imagine that you were playing in your yard, and you saw that the kid across the street was being picked on by someone older than you. How do you feel is the best way to respond to that situation? Write about what you would do.</p>

<p>Math: Ms. Anderson assigned her students a book to read. The book is 126 pages in total. She said the book must be finished in 2 weeks. If her students read the same number of pages each night, how many pages would they need to read each day?</p>	<p>Art: Use pen, pencil, crayons, markers, or color pencils to write your name or a word in an artistic way. Some ideas include bubble letters, block letters, colors, etc.</p> 	<p>Math: Tickets to a fireworks show are \$2.00 per person, and parking is \$11.00 for each car. Sanika's mom and dad agree to drive both cars so she can bring her 8 cousins. They pay the fees with a \$50 bill. How much change will they receive?</p>	<p>Spelling/Phonics: Using this list of words below, write each word dividing up syllables. For example, basketball would look like this: bas/ket/ball</p> <p>Word list: <i>athletic, ladybug, respectful, afternoon, energy</i></p> <p>Once you write them, say them aloud to a parent or sibling.</p>	<p>Writing: When you think about the next year of school, what type of teacher do you hope you will have? Describe the best possible teacher for you.</p>
<p>Music: Have your family create a list of songs that everyone knows. Try playing the game <i>Finish the Lyrics</i>. One person sings the beginning of the lines and the first person in your family to correctly sing the rest of the lyrics, WINS!</p> 	<p>Reading: Using this list of words below, write a synonym (word that means the same) for each of the words:</p> <p><i>boiling quick angry quiet scared</i></p>	<p>Math: A local city Mayor is planning for the annual fireworks show. He knows a box of 12 sparklers costs \$2.00. They are expecting 500 people to attend the celebration. How much will the city spend if they want each person to get a sparkler?</p> 	<p>Math: There are 82 fifth graders going on a field trip. The bus holds 53 students, how many buses will they need to take for their field trip?</p> 	<p>Writing: Write a realistic fiction story about a fourth-grade student from 20 years ago. What was their daily life like? How was it similar to yours? How was it different?</p>
<p>Math: Ms. Wonka baked three trays of 36 cookies each. After they cooled, she divided the cookies evenly into 27 bags. How many cookies did she place in each bag?</p>	<p>Reading: Set a timer for 20 minutes and read your favorite book.</p> 	<p>Math: An ice cream shop sells cones for \$2.00 each. This weekend the shop sold 250 cones on Saturday. Sunday sales were half of Saturday sales. If their goal was to make \$1,000 in ice cream sales this weekend, did they meet their goal? Why or why not?</p>	<p>Music: Find an area that you can pretend is a stage for family and friends to perform. Put on a talent show for each other. Have fun with it! Use some of your favorite music.</p> 	<p>Writing: Write about some things you can do during the summertime but cannot enjoy during the school year. Describe how it makes you feel.</p>

Answers to Math:

- Nick and Angela left at 9:00 pm to go to the show.
- They need six vans for 64 students so the total cost for vans will be \$750.
- Johnny spent a total of \$4.20 on his items, so he has \$6.30 left from the \$10.50 he started with.
- The area to be fenced has a total perimeter of 1,000 yards. Since there are three feet per yard, the total number of feet of fencing needed will be 3,000.
- Since there are 14 days in 2 weeks, the students will need to read 9 pages per night.

- The total number of people going, including Sanika and her parents is 11. It will cost \$22.00 for the show, plus a parking cost of \$22.00 for the two cars driven. So the total cost will be \$44.00. They should receive \$6.00 in change from their \$50 bill.
- Since there are 12 sparklers per box, for 500 people you would need 42 boxes of sparklers. The total cost would then be \$84.00.
- They will need two buses to carry all the fifth graders.
- Ms. Wonka baked a total of 108 cookies. She placed 4 cookies in each bag.
- The ice cream shop made \$500 on Saturday and \$250 on Sunday. The total sales were \$750 for the weekend, so they did not reach their goal of \$1,000.

